








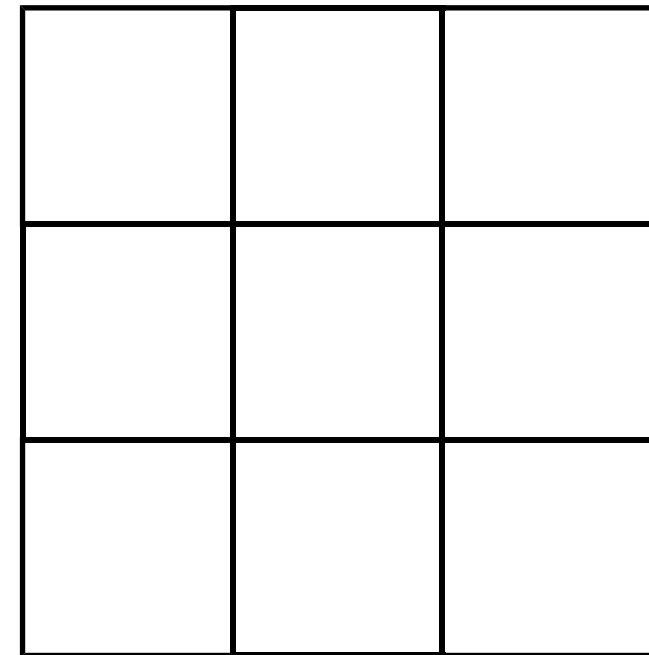





Ghostly Addition Square

Each ghost represents a number. The numbers in each row and column add to the number given. Can you work out the number each ghost represents? We have provided a blank grid to help you with your working out.

			= 30
			= 15
			= 18



=	=	=
18	21	24

	=	<input style="width: 40px; height: 30px;" type="text"/>		=	<input style="width: 40px; height: 30px;" type="text"/>		=	<input style="width: 40px; height: 30px;" type="text"/>
---	---	---	---	---	---	---	---	---